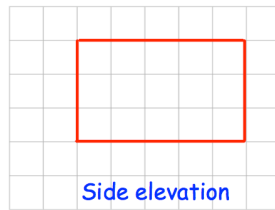
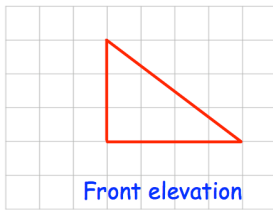



16th March



Corbettmaths



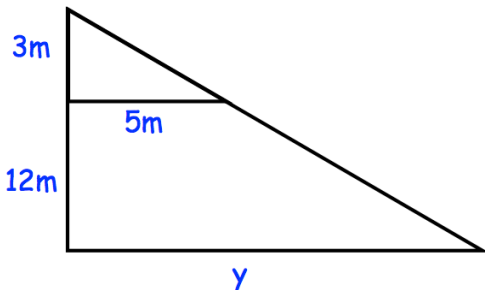
On the grid, draw the plan view.



Draw a sketch of the solid shape.

Factorise

$$x^2 - 10x + 25$$

Find y

Solve the simultaneous equations

$$2x + 4y = 24$$

$$6x - 5y = 21$$