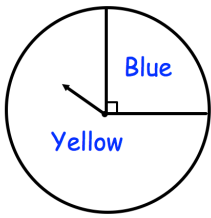


17th March

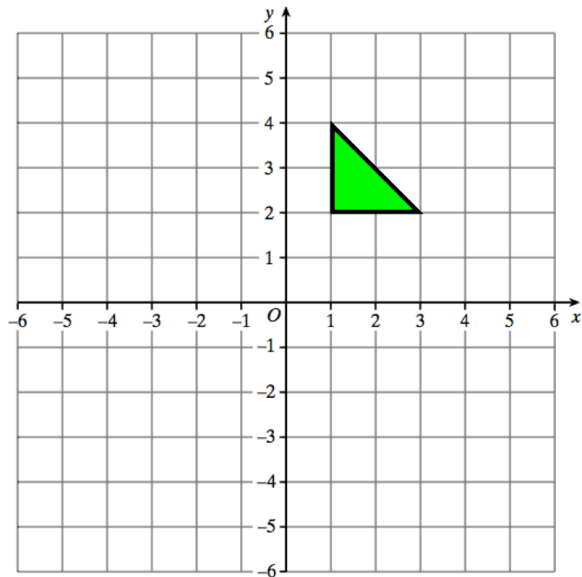


Corbettmaths



Shown is a fair spinner

Mark the scale with the probability of landing on yellow.



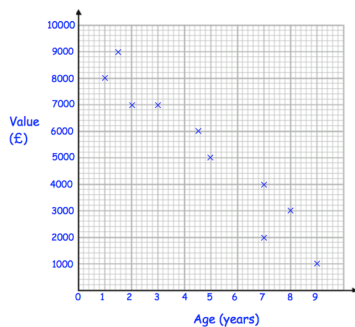
Reflect the green triangle in the x-axis

Reflect the green triangle in the line  $x = 1$

There are 8 bags of sweets.  
5 bags each have 18 sweets.  
The other 3 bags have an equal number of sweets.

Altogether there are 150 sweets

How many sweets are there in the other 3 bags?



What type of correlation is shown?