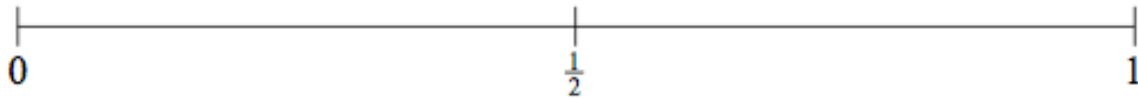


19th March



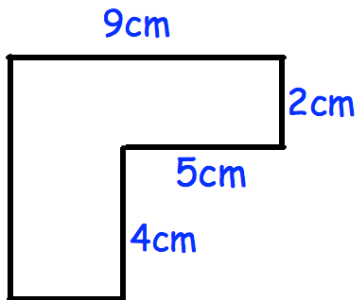
Corbettmaths



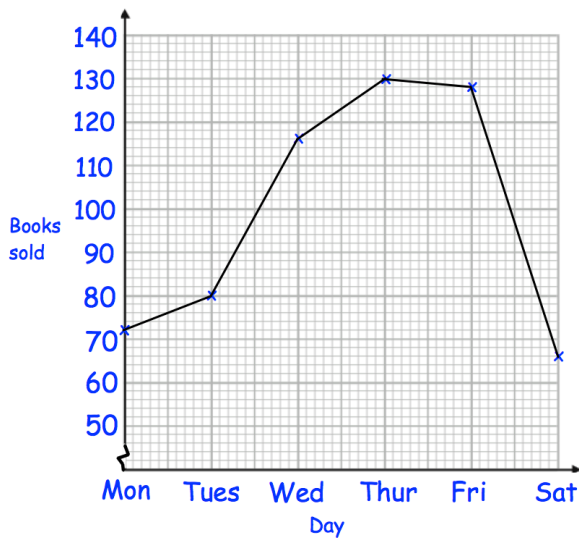
Mark on the probability scale, the following probabilities.

(i) A baby being a girl. Use the letter G.

(ii) Rolling a normal 6 sided dice and getting a 7. Use the letter D



Calculate the perimeter



On which day did the charity shop sell the least books?

How many books were sold on Tuesday?

How many books were sold in total?

Work out the mean number of books sold per day.