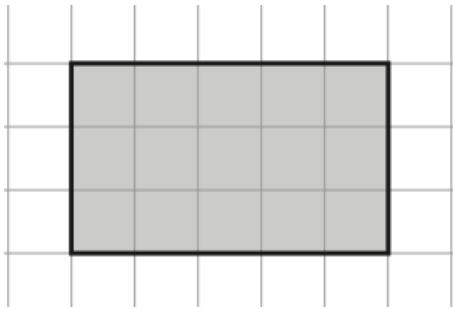


28th March

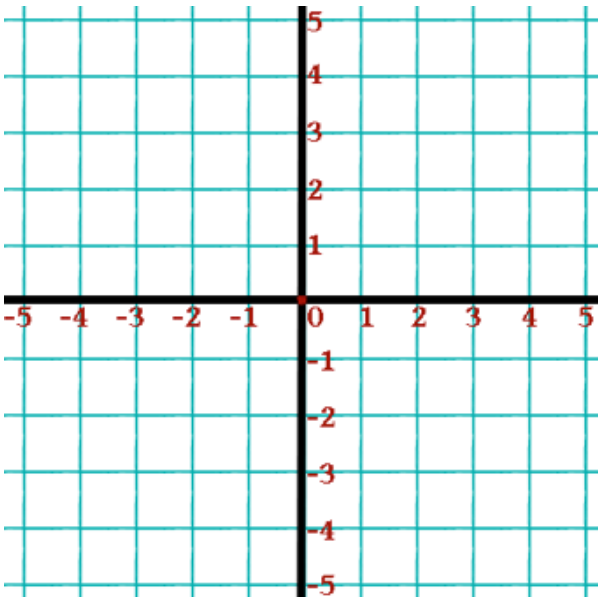


Corbettmaths



Work out the area

Work out the perimeter



Plot these coordinates

- A(-2, 1)
- B(4, 1)
- C(4, -3)

Name the shape ABC



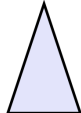
A



B



C



D

Which shape has 4 lines of symmetry

Which shapes have 1 line of symmetry

Which shape has 5 lines of symmetry