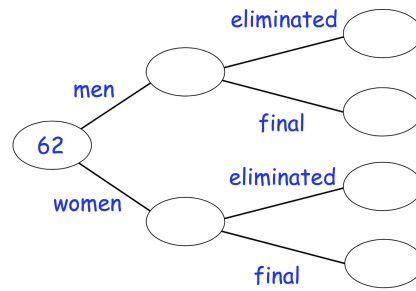


3rd March



Corbettmaths

62 people took part in a talent show
 43 of the people were women.
 10 people made it through to the final and the rest were eliminated.
 3 men made it through to the final.
 Complete the frequency tree



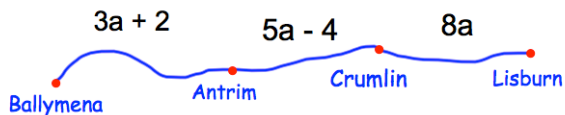
Miss Jones gives her class a test.
 The test is out of 40 marks.

Here are their scores.

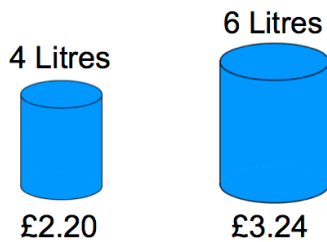
31 29 20 35 32
 38 32

The pass mark is 75%

How many students pass?

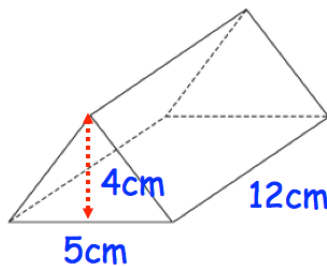


Write an expression for the distance from Antrim to Lisburn



Cooking oil is sold in two sizes of cans.

Which size of can gives the better value for money?



Find the volume of the prism.