
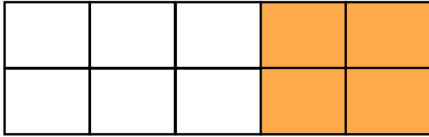


31st March

Corbettmaths

What fraction of this shape is shaded? Give your answer in it's simplest form.



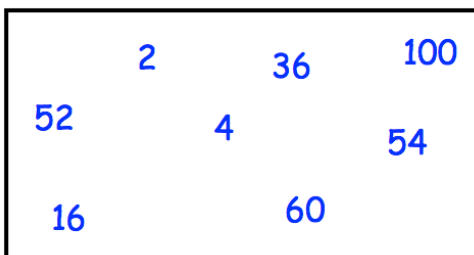
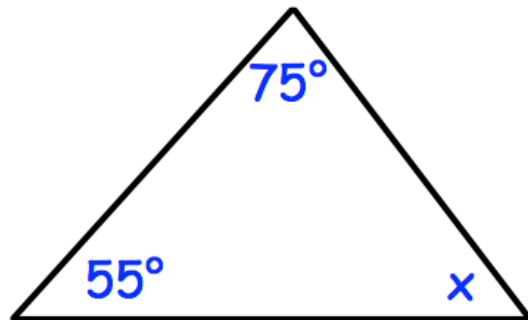
Name this solid

Draw the net of a square based pyramid.

37×18

$2837 + 829$

Find x



Circle all the multiples of 4