


8th March



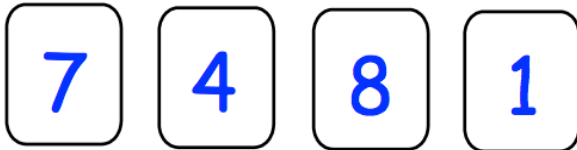
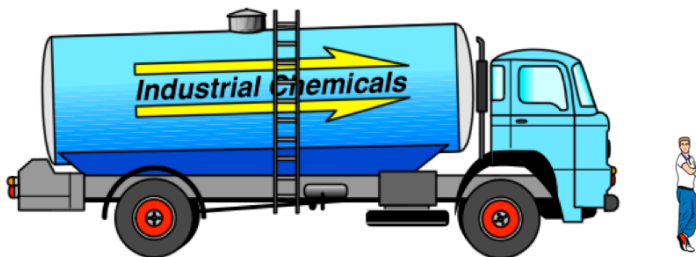
Corbettmaths

Sketch an isosceles triangle

Sketch a right angled triangle



What fraction of this grid is shaded?

Write down the largest **even** number you can using all four cards

The scale diagram shows a man and a lorry.

The man is 6 feet tall.

Estimate the length of the lorry in feet.