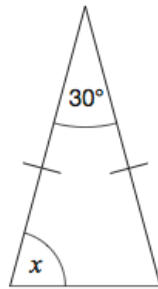


15th May



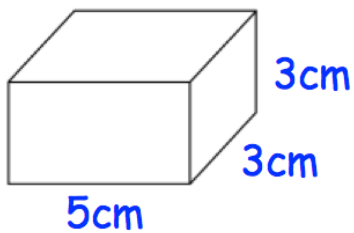
Corbettmaths

Find x

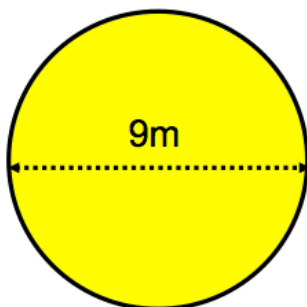
Martin is x years old.
Jennifer is 6 years younger than Martin.
Connor is three times as old as Martin.

Write an expression for Conner's age.

Write an expression for Jennifer's age.

Multiply out $6(x - 3)$ 

Calculate the surface area of the cuboid



Calculate the area of the circle