




17th May	
<p style="text-align: center;">Menu</p> <p>Burger 90p</p> <p>Egg 70p</p> <p>Chips 80p</p> <p>Mash 65p</p> <p>Drink 55p</p>	<div style="text-align: right;">  Corbettmaths </div> <p>Una buys a portion of chips. She pays with 5p pieces. How many does she need?</p>
<p>Freddy buys three burgers, two portions of chips and a drink.</p> <p>How much does this cost?</p>	
<div style="text-align: center;">  </div> <p>What percentage of this shape is shaded?</p>	
<p>Shown below is Donald</p> <div style="text-align: center;">  </div>	<p>Circle the most appropriate estimate for his height.</p> <p>1.8mm 1.8cm 1.8m 1.8km</p>
<p>Add together:</p> <ul style="list-style-type: none"> - The number of days in June - The number of seconds in a minute - The number of months in a year 	