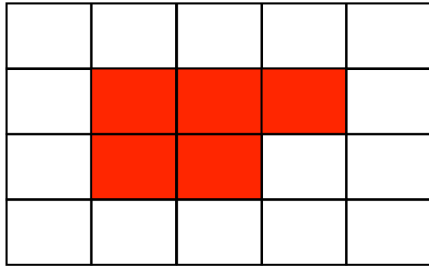
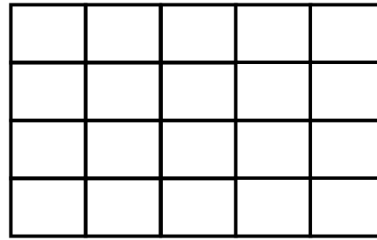


18th May



Corbettmaths

Shaded three fifths of this grid



Draw on 1cm grid


What is the area?

What is the perimeter?

Arrange the following numbers in order, from smallest to largest

0.61      59%      0.6      62%

Small pack  
Contents  
3 plates

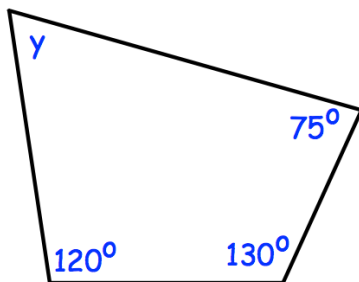


Large pack  
Contents  
12 plates

£5.25

£21.24

Which is better value for money?



Find the size of y