

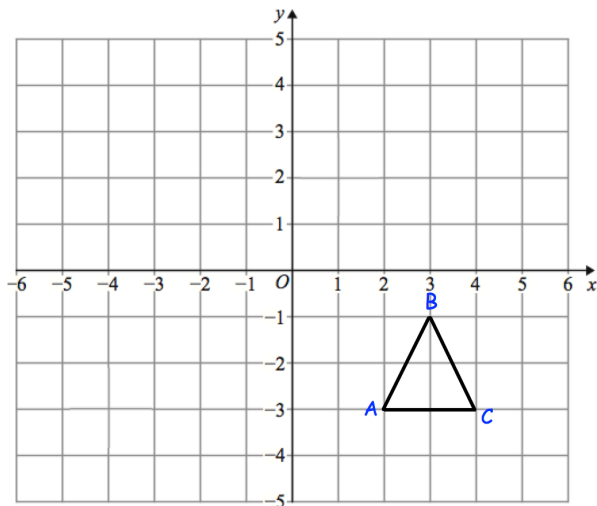
25th May

Corbettmaths

In 2014, Bristol United's average attendance was 2000
 The following season, the average attendance increased by $\frac{2}{5}$.
 Work out the average attendance in 2015.


In a class of 20 students, 12 are male.
 What fraction of the class are male?

What percentage of the class are male?




Reflect triangle ABC using the mirror line $y = 1$

Translate triangle ABC by the vector $\begin{pmatrix} -5 \\ -2 \end{pmatrix}$



Draw the radius



Draw the diameter