

28th May

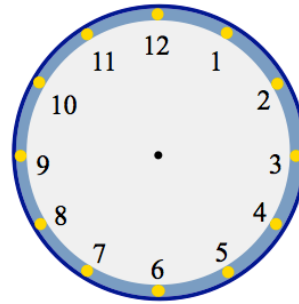


Corbettmaths

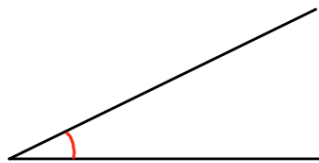
$6000 \div 100$

$50 \div 10$

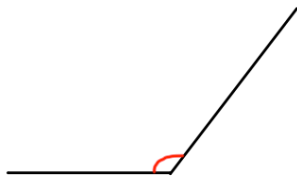
Show the time 6:55pm on the clock



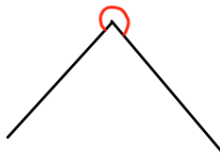
Answer angle



Answer angle



Answer angle



Answer angle

Name the types of angle shown above

Eight people book a holiday, costing \$284 each. How much is the total cost?