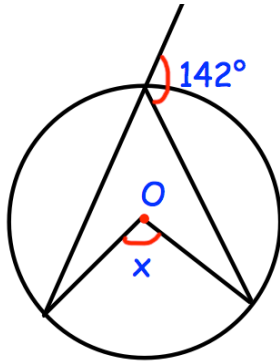


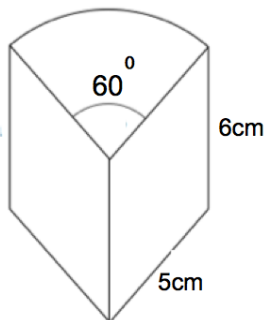
3rd May



Corbettmaths

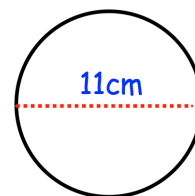
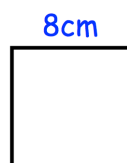


Find x

Simplify  $\sqrt{80}$ 

Calculate the volume of the prism.

Will the square fit inside the circle without touching the circle?



Evaluate

$$\left(\frac{16}{25}\right)^{\frac{1}{2}}$$