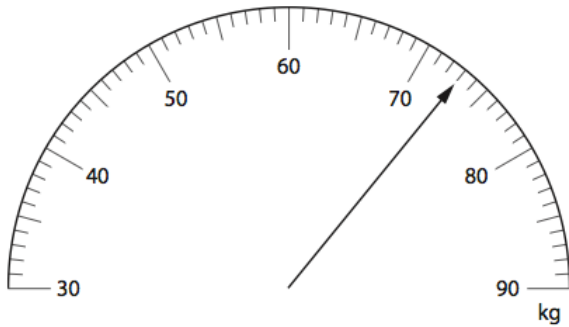


31st May

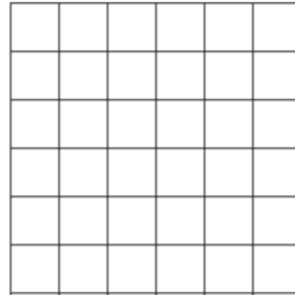
Corbettmaths



What weight is shown on the scales?

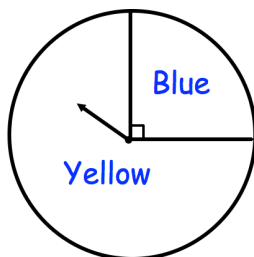
Express 50p as a fraction of £4
Give your answer in its simplest form.

On the grid, draw a right angled triangle.



2 birthday cards at £2.70 each
1 toy at £6.50 each
1 book at £5.75 each

Hannah pays with a £50 note.
How much change does she get?



The fair spinner is spun once.

What is the probability the spinner lands on Yellow?