

5th May



Corbettmaths

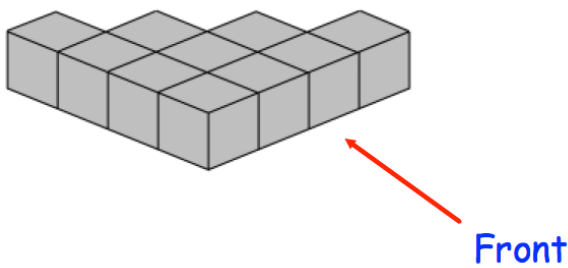
SALE
1/3 OFF ALL ITEMS

What is the sale price?

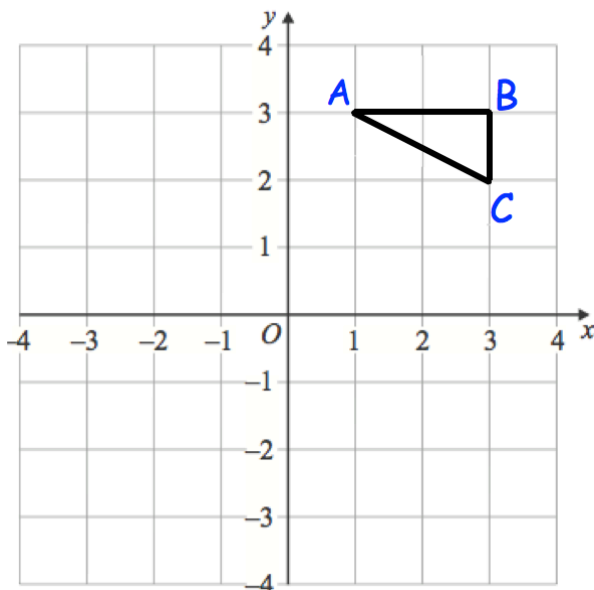

The original price of a football is £8.16

Apples cost a pence each.
Bananas cost b pence each.

Write down an expression for the total cost, in pencil, of 6 apples and 2 bananas.



Draw the plan view



Reflect triangle ABC in the y -axis

Rotate triangle ABC 90 degrees clockwise about the origin,