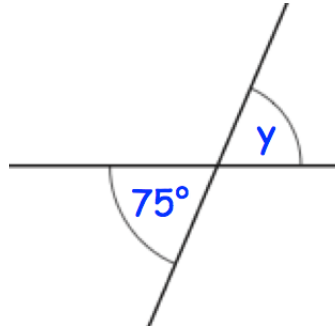


2nd November

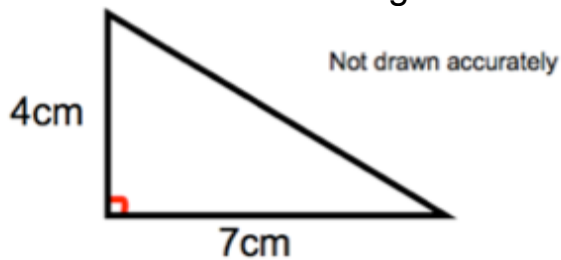


Corbettmaths

$$-20 \div 4$$

Find y 

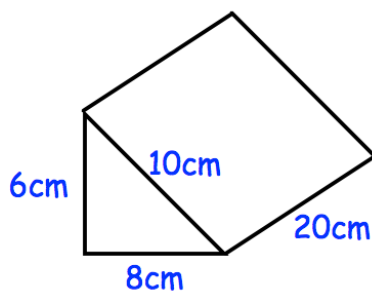
Find the area of the triangle.



James saves money every week.

Week 1 he saves 1p
Week 2 he saves 2p
Week 3 he saves 4p
Week 4 he saves 8p and so on.

How much money does he have saved in total up to and including week 8.



Calculate the volume