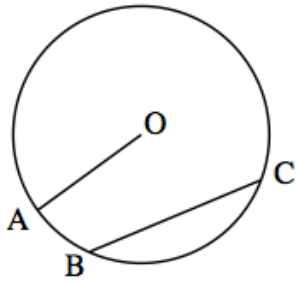


20th November



Corbettmaths



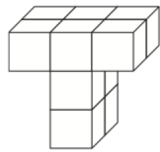
What is the name of the line OA?

What is the name of the line BC?

Weekly wage = basic wage +
number of cars sold x bonus
payment


Mike sold 9 cars. How much was
his weekly wage?

The basic wage is £250 and a
bonus of £20 is paid for every car
sold.



Front

Draw the side elevation



Circle the correct word to describe

$$6y + z$$

Equation Expression Identity

Simplify fully

$$4a - 5c + a - 2c$$

Expand and simplify

$$5(x + 5) - 4(x - 2)$$