

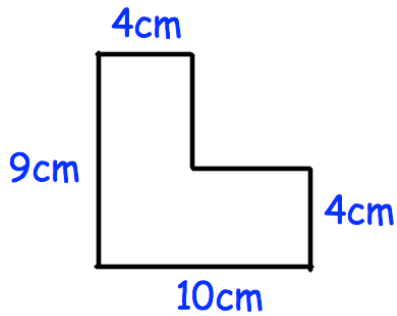
23rd November



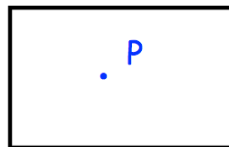
Corbettmaths

Oranges cost x pence each.

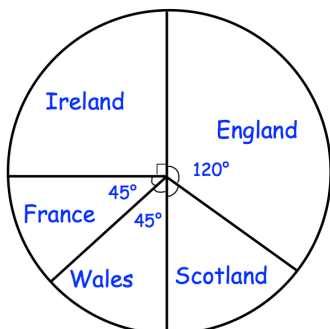
Write an expression for the total cost of 5 oranges.



Calculate the perimeter



Enlarge the rectangle by scale factor 2, using P as a centre of enlargement.



2400 fans were asked which team they support.

How many support Scotland?