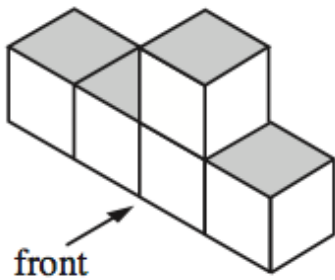


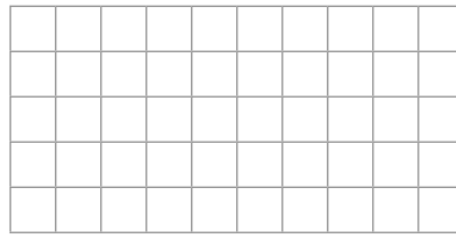
29th November




Corbettmaths





Draw the front view



Draw the side view



Draw the plan view



Label the probability scale to show:

- a) The probability of rolling an odd number on a dice. Label it with an A
- b) The probability of rolling a number below 6. Label it with a B

There are only red sweets and green sweets in a jar.
The ratio of red sweets to green sweets is 2:5

What fraction of the sweets are red?

Natalie, Olivia and Percy share 240 sweets in the ratio 3:5:4

How many more sweets does Olivia have than Percy?