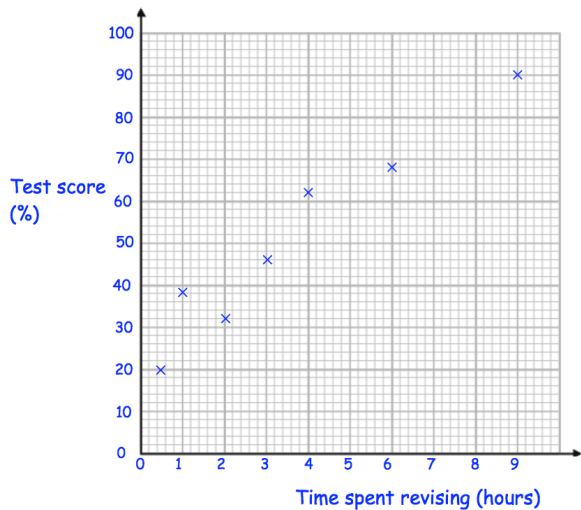


4th November



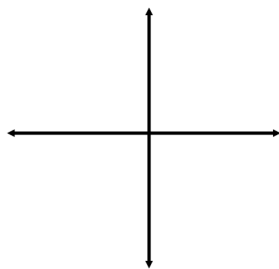
Corbettmaths



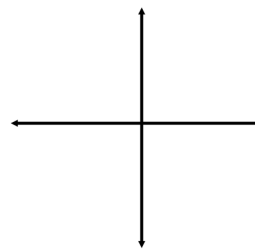
The table shows the time spent revising and the test scores of seven students.

Another student has spent 4.5 hours revising.  
Estimate their test result.

A student scored 55%  
Estimate how much time they spent revising.



Sketch  $y = x^3$

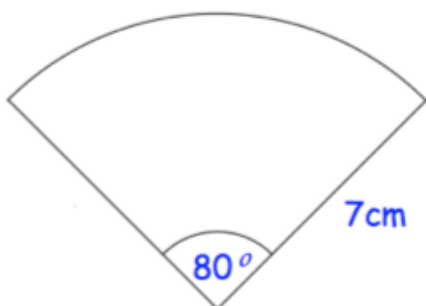


Sketch  $y = \frac{1}{x}$  where  $x \neq 0$

A line has equation  $y = 5x - 4$

Write down the gradient of the line

Write down the y-intercept of the line



Calculate the perimeter of this sector.