

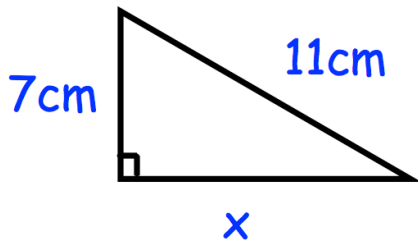
6th November



Corbettmaths

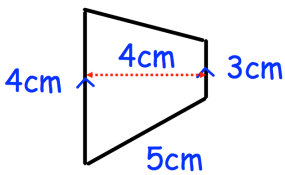
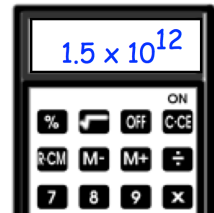
Calculate the difference between the 30th term and 60th term of the sequence

8, 3, -2, -7,



Find x

Peter has multiplied two numbers using his calculator. The calculator shows the answer. He can remember that one number was 5000. What was the other number used in the multiplication?



The trapezium below is enlarged by scale factor 3. Work out the area of the enlarged trapezium.

Shop A
50% extra free



Only £40

Shop B
Buy one get the second
HALF PRICE



Normal price £40 for 100ml

Which is best value for money?