
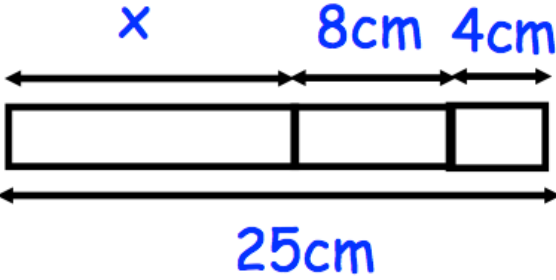
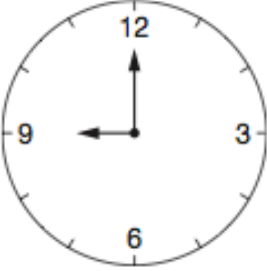


| 8th November | |  Corbettmaths |
|--|--|---|
| Work out 50% of £40 | Work out 25% of 24cm | |
| <p style="text-align: center;">3 6 12 24</p> <p>What is the rule for the sequence above?</p> | What are the next two numbers? | |
| How many days are there in four consecutive years? | | |
|  <p style="text-align: center;">x 8cm 4cm</p> <p style="text-align: center;">25cm</p> | Find x | |
|  | <p>Matt arrives at school at the time shown.</p> <p>He left his house twenty five minutes earlier.</p> <p>What time did he leave?</p> | |