




9th November	
12^2	 Corbettmaths
<p>The circumference of the Earth is forty thousand and seventy five kilometres.</p> <p>Write forty thousand and seventy five in figures.</p>	
<p>123 119 115</p> <p>Write down the next two terms</p>	<p>22 cannot be a term in this sequence.</p> <p>Why?</p>
<p>Mrs O'Hagan gave her class a test. Two thirds of the class passed the test.</p> <p>There are 27 students in the class.</p> <p>How many failed the test?</p>	
<p>The probability of a football team winning a match is 80%.</p> <p>The probability of the team drawing is 13%</p>	<p>What is the probability of the team losing the match?</p>