

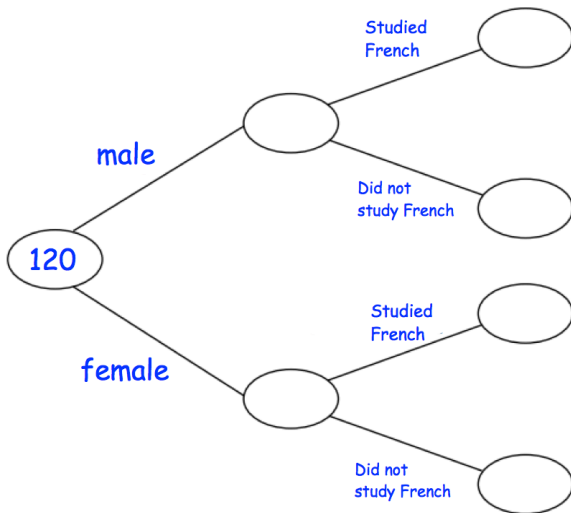
25th October



Corbettmaths

Write 0.13 as a fraction

Write 0.13 as a percentage



There are 120 students in year 11.

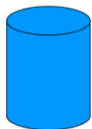
45 of the students are female
 27 of the male students studied French
 18 of the female students did not study French

Complete the frequency tree

$$\frac{3}{7} + \frac{1}{5}$$

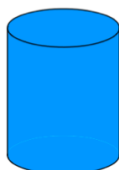
$$\frac{3}{7} \times \frac{1}{5}$$

4 Litres



£2.20

6 Litres



£3.24

Cooking oil is sold in two sizes of cans.
 Which size of can gives the better value for money?