

3rd October

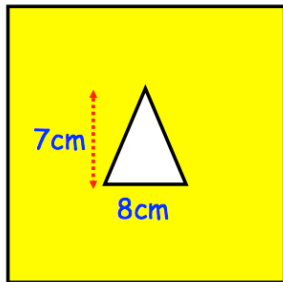


Corbettmaths



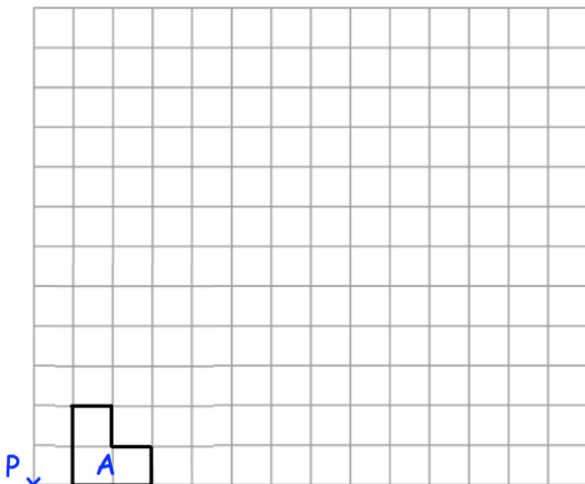
The small bottle holds 250ml.
The large bottle holds 2L.

How many times larger is the large bottle?

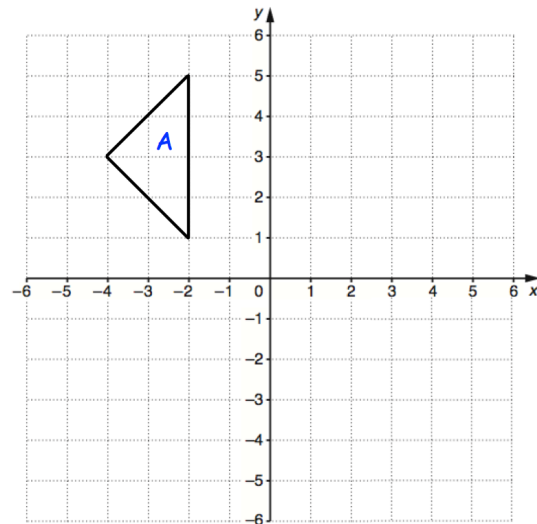


The perimeter of the square is 60cm.

Find the shaded area.



Enlarge shape A by scale factor 4



Translate triangle A by $\begin{pmatrix} 5 \\ -6 \end{pmatrix}$.

Write 60 as a product of primes