

11th October

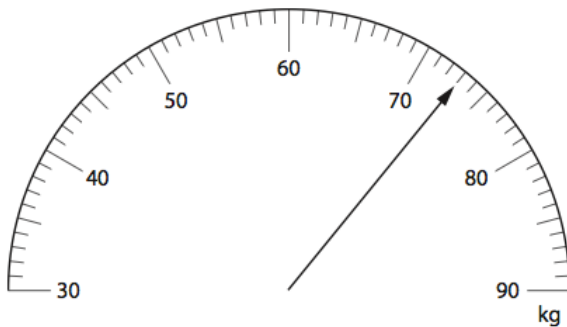
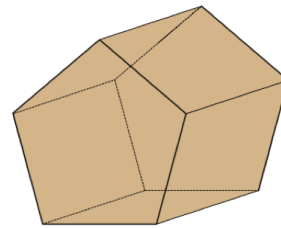


Corbettmaths

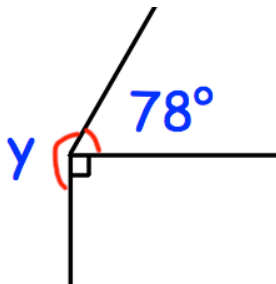
$93 + 15$

$98 - 39$

Shown is a pentagonal prism.
How many vertices does it have?



What weight is shown on the scales?



Find y

5×4^2