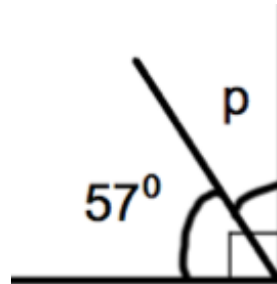
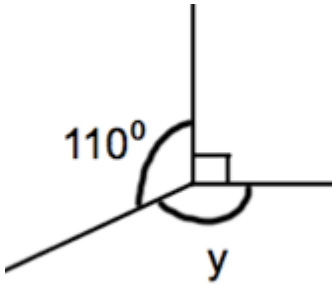


13th October

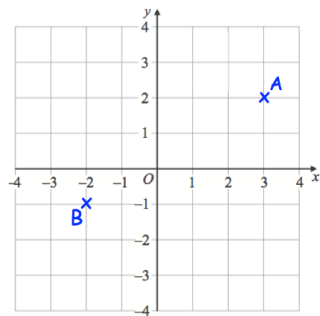


Corbettmaths



Julie is making some curtains.  
She has \$100 to spend.  
The material costs \$14 per metre  
and she needs 8 metres.

Can Julie afford the material



Write down the coordinates of A

Write down the coordinates of B

Mrs Jenkins had 284 Christmas cards  
to post.  
She posted 39 on Monday.  
She posted 129 on Tuesday.  
How many Christmas cards does she  
have left to post?

Find the area of the rectangle

