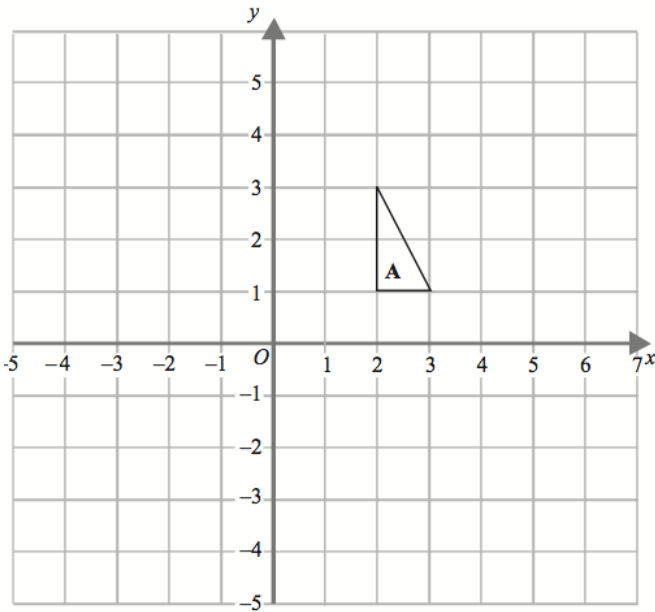


19th October

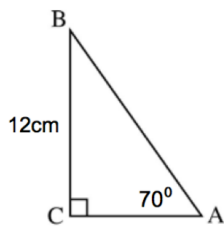
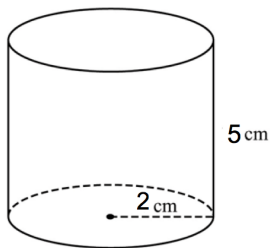


Corbettmaths



Enlarge A by scale factor $-\frac{1}{2}$, centre O.

Calculate the surface area



Calculate the perimeter of ABC.

Make m the subject of

$$y = \frac{m + 4}{m + 5}$$