

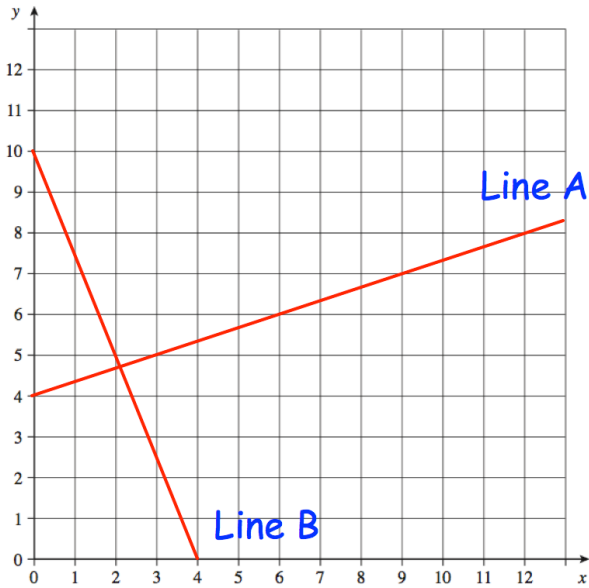
2nd October



Corbettmaths

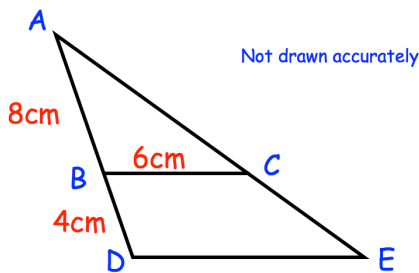
Estimate

$$\sqrt{\frac{50.77}{0.513}}$$

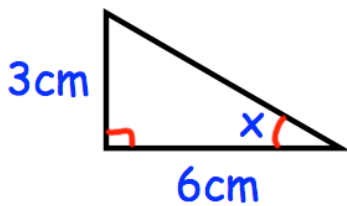


Write down the equation of Line A

Write down the equation of Line B



Triangle  $ABC$  is similar to triangle  $ADE$ .  
Work out the length of  $DE$ .



Find the size of the angle  $x$ .