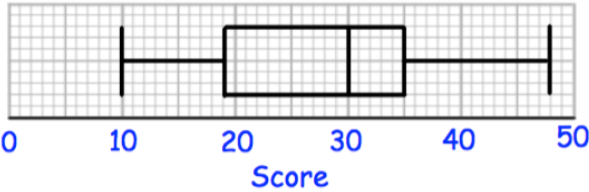


27th October



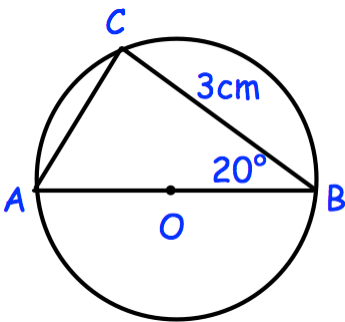
Corbettmaths

There are 40 children at a youth club.
 There are 23 girls.
 9 girls play rounders.
 4 boys do not play rounders.
 How many boys play rounders at the youth club?



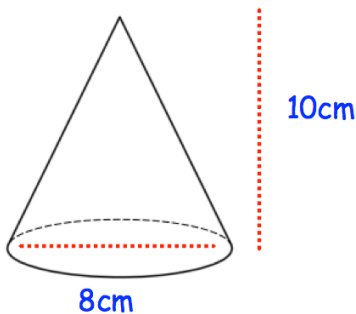
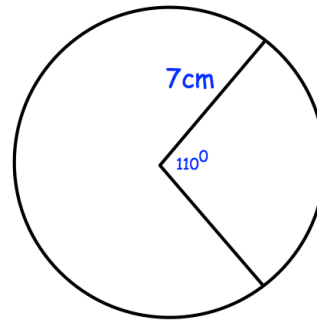
Find the range.

Write down the median.



Find the size of the diameter, AB.

Calculate the area of the major sector. The minor sector has angle 110 degrees.



Calculate the volume of the cone.