

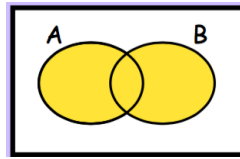
30th October



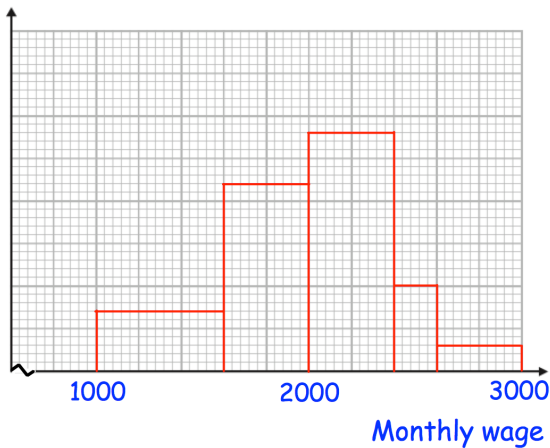
Corbettmaths

Which region is shown in yellow?

$A \cap B$ $A' \cap B$ $A \cup B$ $A \cup B'$

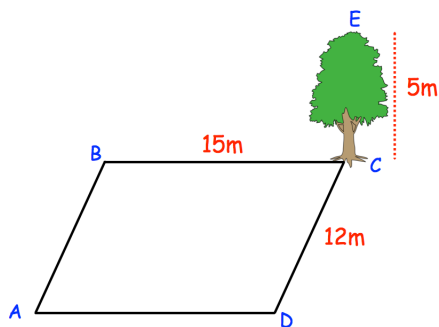


Frequency Density



Work out an estimate of how many employees have a salary of between £2300 and £2900

The histogram below shows the monthly salaries of employees.
There are 216 people who have a monthly salary of between £1800 and £2100.



Calculate angle CAE.

Carl says the solutions to $x^2 - 7x + 12 > 0$ is $3 < x < 4$

Is he correct?
Explain your answer.