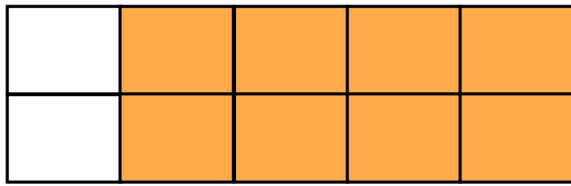


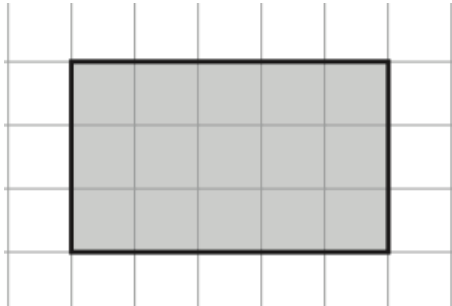
9th October



Corbettmaths

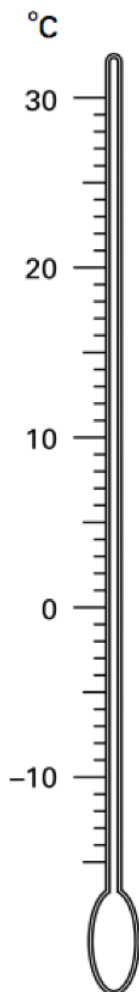


What fraction of this shape is unshaded? Give your answer in its simplest form.



Work out the area

Work out the perimeter



Show the temperature  $12^{\circ}\text{C}$  with an arrow and the letter A.

Show the temperature  $-14^{\circ}\text{C}$  with an arrow and the letter B.

Work out the difference in temperature between A and B.