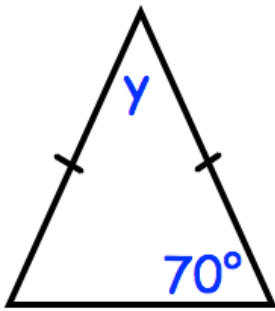


15th September



Corbettmaths



Find the size of y .

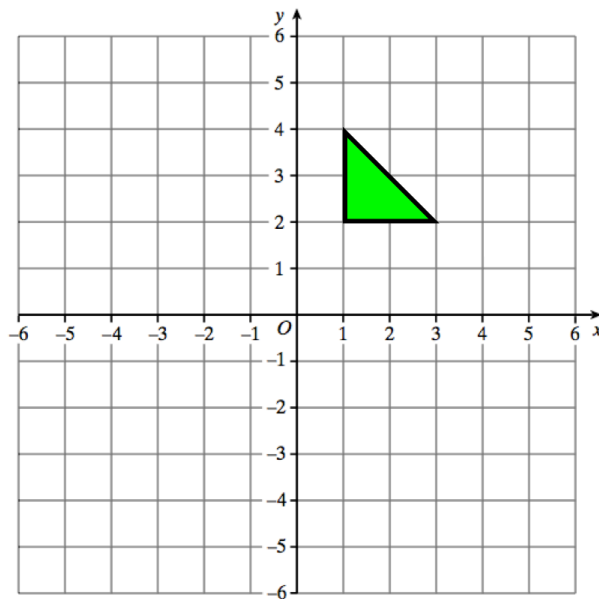
What type of triangle is shown?

Simplify

$2 \times 4y$

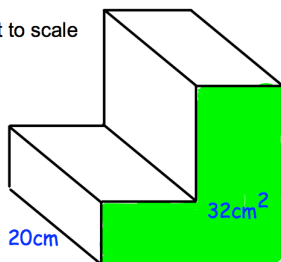
Simplify

$a \times a \times a$



Reflect the triangle in the y -axis
Label the new triangle B.

Not to scale



The cross-sectional area is 32cm^2 .
Work out the volume of the prism.