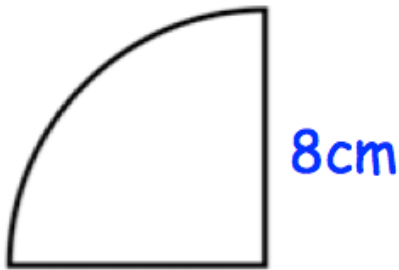


15th September

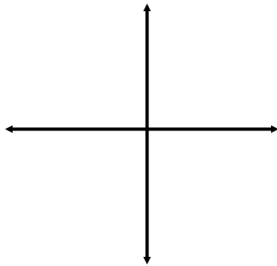
Corbettmaths

The bearing of A from B is 098° ,
find the bearing of B from A.

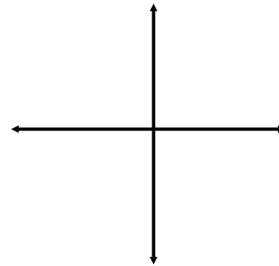


Calculate the area.
Give your answer in terms of π

Work out the LCM of 28 and 42



Sketch $y = x^3$



Sketch $y = -x^3$

A full box holds 50 CDs to the
nearest 10.

What is the greatest number of CDs
that 8 boxes would hold?