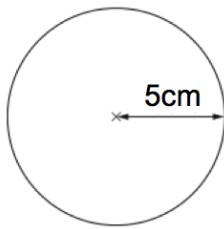


30th September



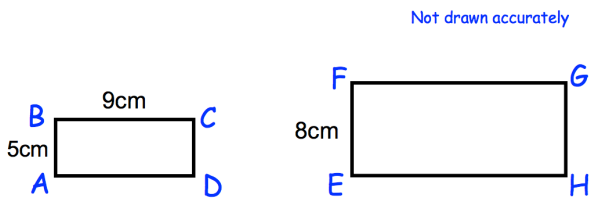
Corbettmaths



Find the area of the circle.
Give your answer in terms of π

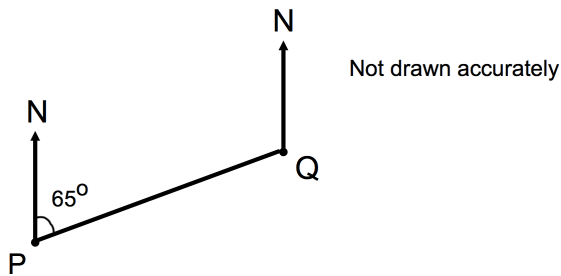
Factorise $x^2 - 14x + 48$

Factorise $x^2 + 17x + 60$



Rectangles $ABCD$ and $EFGH$ are similar.

Work out the length of FG .



Find the bearing of P from Q

6.1154 has been truncated to four decimal places.

Write down an inequality to show the range of possible actual values.