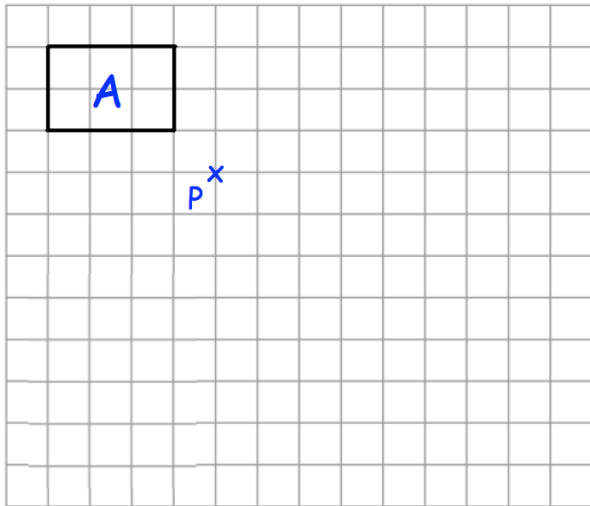


5th September



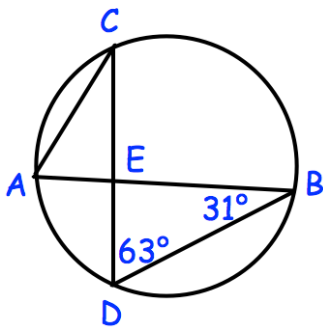
Corbettmaths



Enlarge shape A by scale factor -1.5 , using the point P as centre of enlargement.

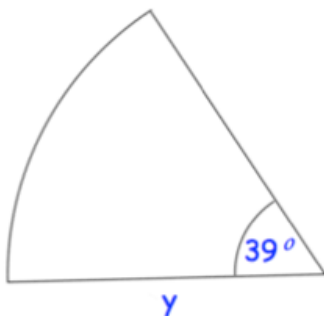
Helen is taking part in a quiz on TV.
The probability she answers a question correctly is $\frac{3}{5}$
Helen is asked two questions

Calculate the probability she answers both questions incorrectly.



Find angles
ACD

AEC



The area of the sector is 10cm^2 .
Find y.