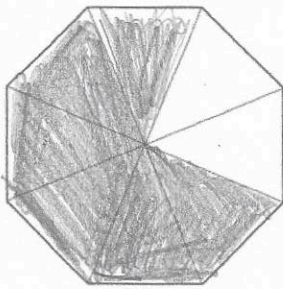


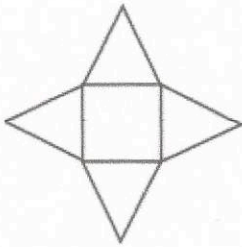
12th April



Corbettmaths



Shade in 75% of this shape



This is the net of which solid?

square-based pyramid

How many edges does that solid have?

8

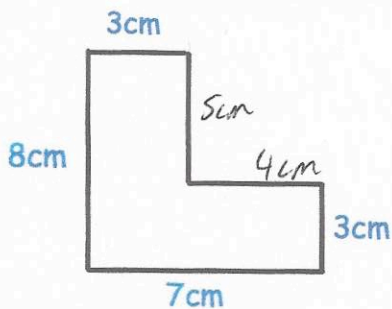
Write down all the factors of 33

1, 3, 11, 33

Work out

$$(-3)^2$$

$$-3 \times -3 = 9$$

9

Find the perimeter of the shape shown.

$$8 + 7 + 3 + 4 + 5 + 3 =$$

30cm