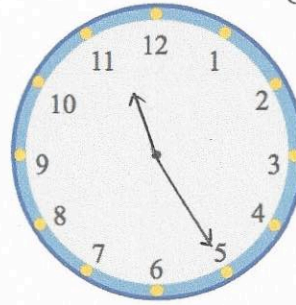


17th April



Corbettmaths

Show the time 11:25 on the clock



Work out $10 + 2 \times 4$

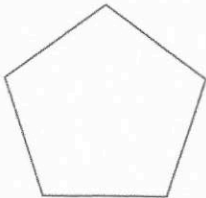
$$10 + 8$$

$$18$$


Work out $10 \div 2 + 12 \div 3$

$$5 + 4$$

$$9$$



Name Pentagon



Name Trapezium


meter reading

Jan 5463
June 5651

How many units of electricity have been used?

$$\begin{array}{r} 5463 \\ - 5463 \\ \hline 188 \end{array}$$

188



$$\frac{16}{30} = \frac{8}{15}$$

What fraction of the grid is shaded?

Give your answer in its simplest form.

$$\frac{8}{15}$$