
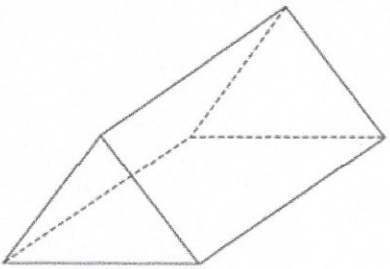
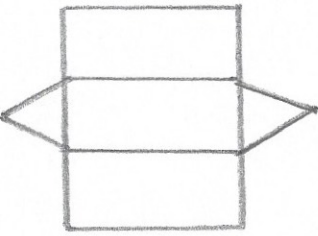


15th July		 Corbettm@ths
Work out $-7 + 2$ -5	Work out $9 - 20 + 1$ -10	
	Draw the net for the solid shape shown. 	
Janice left home at 14:55 and reached town at 15:27. How long did the journey last?	 <u>32 mins</u>	
A piece of wire is 3.8 metres long. It is cut into 8 parts of equal length. How long is each part? 47.5 cm	 $380 \div 8$ $= 47.5$	
-13×7 -91	$220 \div -4$ -55	