
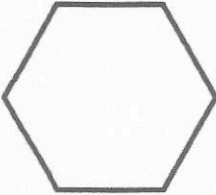

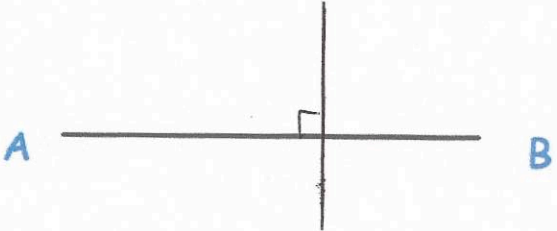


11th April		 Corbettmaths
	Name this shape	Hexagon
Benny is saving for a guitar that costs £105 He saves £15 each week. How many weeks will it take Benny to save for the guitar?		$105 \div 15$ 7 weeks
8 10 12 13 20 23 26 Which two numbers have a sum of 43?	Which two numbers have a product of 240?	20 e 23 12 e 20
Draw a line perpendicular to AB		
Write down the next three terms 87.8 88.1 88.4 _____ 88.7 89 89.3	Write down the next three terms 95 60 25 _____ -10 -45 -80	