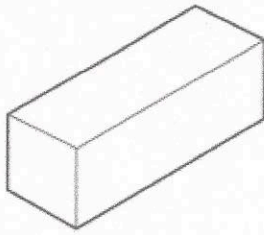
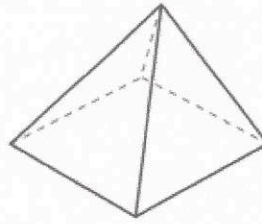
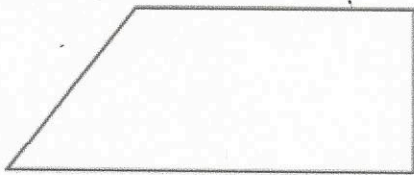
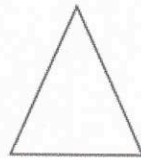


25th April



Corbettmaths

Name this shape CuboidName this shape Square based pyramidName this shape Trapezium

Name this shape (full name)

Isosceles triangle

Write two thousand three hundred and six in figures

2306

Write 3948 to the nearest 100.

3900

There are 6 pens in a packet.

Natalie has 17 packets of pens.

How many pens does she have?

$$\begin{array}{r} 17 \\ \times 6 \\ \hline 102 \end{array}$$

Work out the difference between 4 squared and 8 squared.

$$8^2 = 64$$

$$4^2 = 16$$

$$64 - 16 = 48$$