

6th April



Corbettmaths

Work out $2300 + 1700$

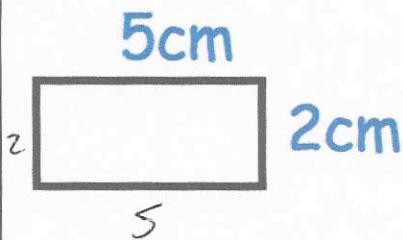
Write your answer in words.

4000

four thousand

$$\boxed{103} - 14 = 89$$

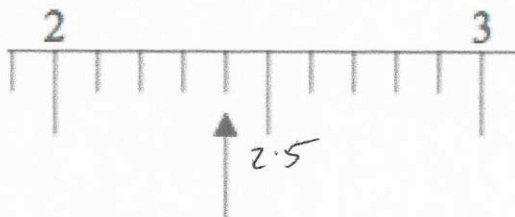
103



Calculate the perimeter

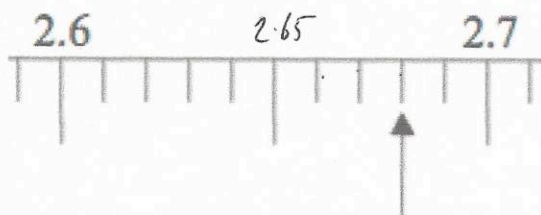
$$5 + 5 + 2 + 2$$

14cm



What number is the arrow pointing to?

2.4



What number is the arrow pointing to?

2.68