




9th April	
	Name this shape  Corbettmaths Octagon
Georgina has 100 counters. 17 are white 29 are purple The rest are silver	How many counters are silver? $17 + 29 = 46$ $100 - 46 = 54$
$24p + 30p + 63p =$ Give your answer in pounds	 $\begin{array}{r} 24 \\ 30 \\ 63 \\ + \\ \hline 117 \end{array}$ $\pounds 1.17$
1 litre costs 60p 3 litres costs? $\pounds 1.80$	$\frac{1}{4}$ litre costs? $15p$
 A tin weighs 300g $\times 4 = 1200g$ How many more grams than 1kg, is the mass of four tins?	 $1kg = 1000g$ $1200 - 1000 = \underline{200g}$