

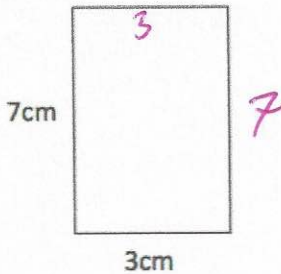
3rd August



The depth of a river is 160cm and each day it falls by 3cm.

After how many days will the depth of the river fall to 124cm?

12 days

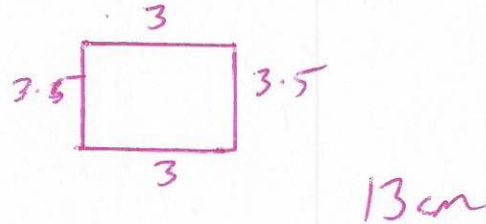


Calculate the perimeter of the rectangle

20cm

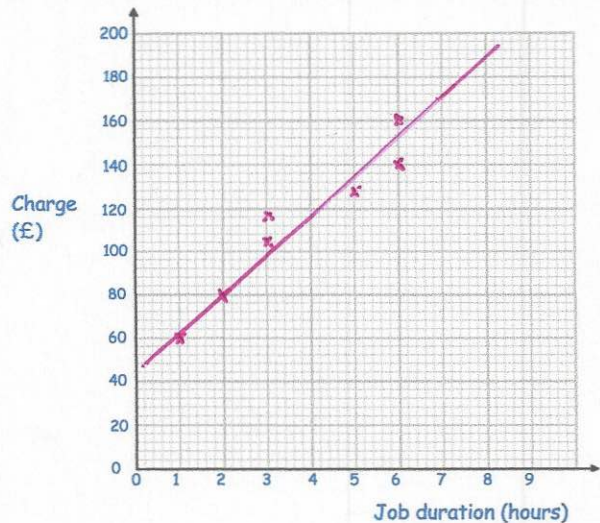
The rectangle is folded vertically.

Calculate the perimeter of the new rectangle



Plot the data on the scatter graph

Job duration (hours)	1	2	3	3	5	6	6
Charge (£)	60	80	104	116	128	140	160



Describe the relationship between the job duration and the charge.

As the job duration increases, so does the charge.  
(positive correlation)