



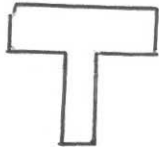


14th August		 Corbettmaths
 Name this solid	Sketch a cube 	Cone
List the first 5 square numbers	List the first 5 cube numbers	$1 \quad 4 \quad 9 \quad 16 \quad 25$
A red apple cost 27p A green apple cost 28p Mary wants buys two red apples and two green apples. She has £1. Is that enough?	 $54 + 56 = 110p$ <u>No</u>	$54p$ $56p$
Draw a shape with one line of symmetry. 		
Find the product of 277 and 52 $\begin{array}{r} 277 \\ \times 52 \\ \hline 554 \\ 13850 \end{array}$		14404