
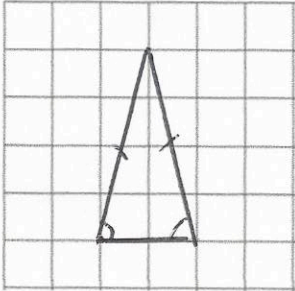
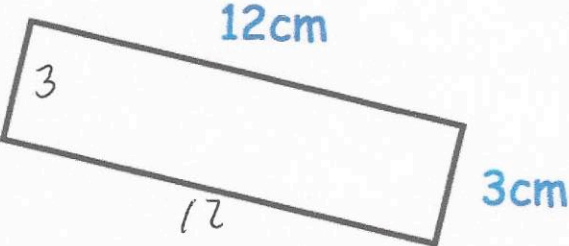


20th August		 Corbettmaths
Work out $45 + 20 + 15$  $80$	Work out $100 - 30 - 15$  $55$	
Round 348 to the nearest 10  $350$	Round 348 to the nearest 100  $300$	
Cook for 15 minutes at $230^{\circ}\text{C}$ Reduce the oven temperature to $160^{\circ}\text{C}$ . Then cook for 40 minutes per kilogram.	How long does it take to cook a 7kg turkey? $40 \times 7 = 280$ $280 + 15 = 295$ minutes  4 hours 55 minutes	
On the grid, draw an isosceles triangle.		
	Work out the perimeter of the rectangle  $30\text{cm}$	