


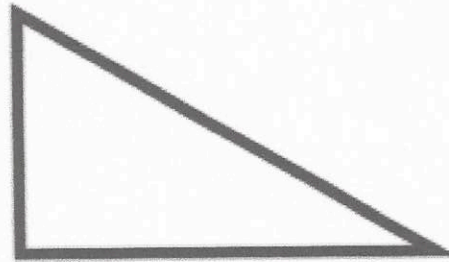
24th August



Corbettmaths

Name this type of triangle

Right angle



This is a centimetre grid.

What is the area of the shape?

10cm²

£15 x number of hours

The cost of a plumber is found by using the formula above.

A job costs £60.

How long did the job last?

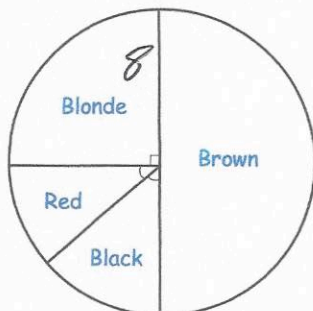
4 hours

Write 0.2 as a fraction

$$\frac{2}{10} = \frac{1}{5}$$

Write 0.2 as a percentage

20%



The pie chart shows information about the hair colour of the students in a class. There are 8 students with blonde hair.

How many students are in the class?

$$8 \times 4 = 32$$