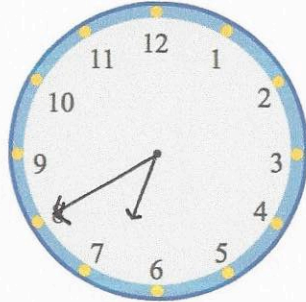
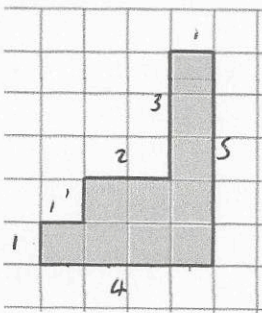



10th December	
<p>23 x 100</p> <p style="text-align: center;">2300</p>	<p>210 ÷ 10</p> <p style="text-align: center;">21</p>
<p>Kelly earns £90 and she saves £60 of it.</p> <p>What fraction of the money did she save?</p>	$\frac{60}{90} = \frac{6}{9} = \frac{2}{3}$
<p>Show the time twenty to seven on the clock.</p>	
	<p>The shape is drawn on a centimetre grid.</p> <p>Work out the perimeter</p> <p style="text-align: center;">18cm</p>
<p>Draw a kite</p> 	<p>Draw a rhombus</p> 