

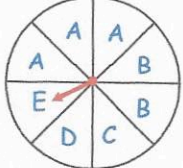


12th December		 Corbettmaths
<p>2948 people visited a church. Round this number to the nearest 10.</p> <p style="text-align: center;"><i>2950</i></p>	<p>2948 people visited a church. Round this number to the nearest 100.</p> <p style="text-align: center;"><i>2900</i></p>	
	<p>Name this solid</p> <p style="text-align: center;"><i>Cone</i></p>	
<p>Work out</p> <p><math>\frac{4}{7}</math> of 28</p> <p style="margin-left: 100px;"><i><math>28 \div 7 = 4</math></i> <i><math>4 \times 4 = 16</math></i></p>	<p style="text-align: center;"><i>16</i></p>	
 <p>A fair spinner has eight equal sections. The sections are labelled A, B, C, D and E as shown below.</p>	<p>Which is the most likely letter that the arrow will land on?</p> <p style="text-align: center;"><i>A</i></p>	
<p>What is the probability that the arrow lands on a B?</p> <p style="text-align: center;"><i><math>\frac{2}{8} = \frac{1}{4}</math></i></p>	<p>What is the probability that the arrow lands on an A?</p> <p style="text-align: center;"><i><math>\frac{3}{8}</math></i></p>	