


13th December



Corbettmaths



The distance around the running track is 400m.

Andrew completes 3 laps.

How far has he run?

1200m
or 1.2 km

Uma completes 8 laps.

How far has she run?

8×400
3200m
3.2 km

Carly runs 4800m.

How many laps has she run?

$4800 \div 400 = 12$
12 laps

76×10

760

84×100

8400

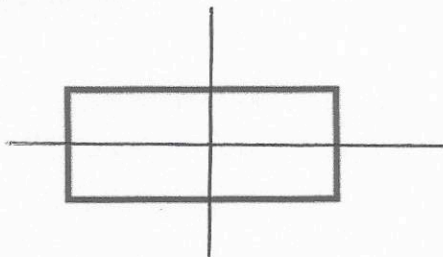
3.8×10

38


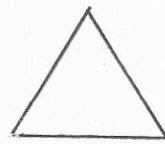
0.3×100

30

Draw all the **lines of symmetry** on the rectangle below



Draw a shape with 3 lines of symmetry.



Show the time 11:15 on the clock.